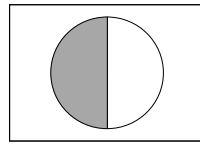
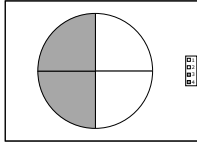
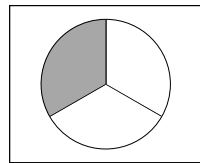
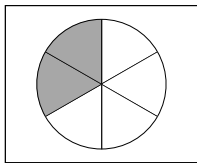


Namn _____

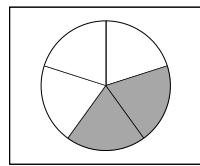
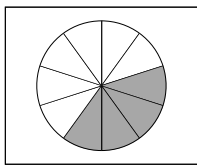
1 a) $\frac{2}{4} = \frac{1}{2}$



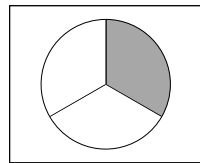
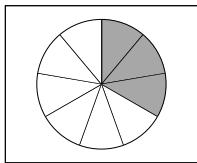
1 b) $\frac{2}{6} = \frac{1}{3}$



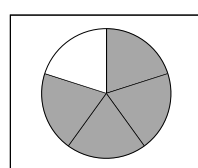
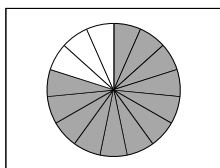
1 c) $\frac{4}{10} = \frac{2}{5}$



1 d) $\frac{3}{9} = \frac{1}{3}$

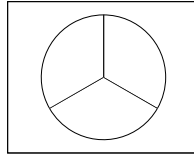
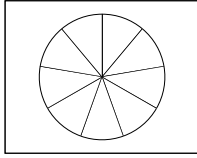


1 e) $\frac{12}{15} = \frac{4}{5}$

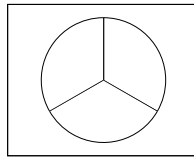
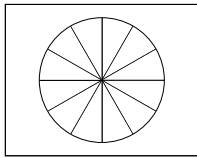


Namn _____

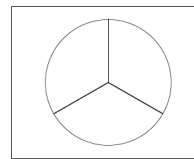
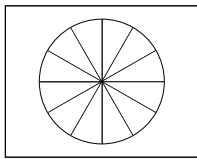
2 a) $\frac{6}{9} = \frac{2}{3}$



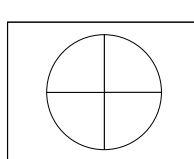
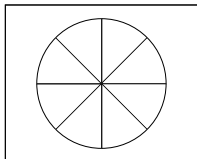
2 b) $\frac{4}{12} = \frac{1}{3}$



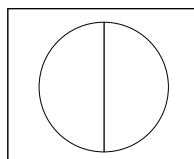
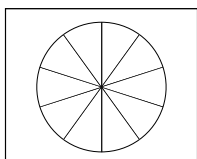
2 c) $\frac{8}{12} = \frac{2}{3}$



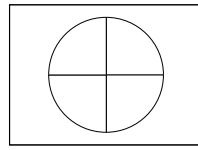
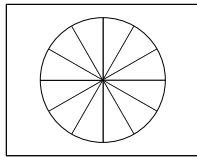
2 d) $\frac{6}{8} = \frac{3}{4}$



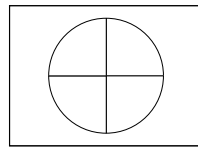
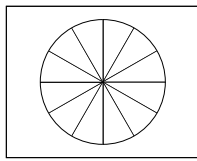
2 e) $\frac{5}{10} = \frac{1}{2}$



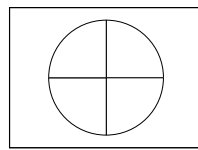
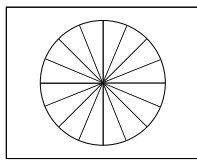
3 a) $\frac{3}{12} = \frac{\quad}{4}$



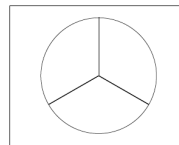
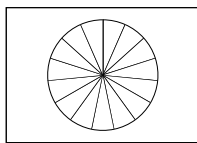
3 b) $\frac{9}{12} = \frac{\quad}{4}$



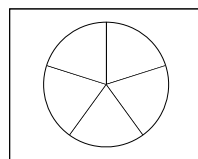
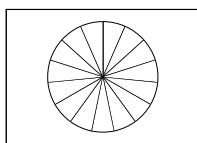
3 c) $\frac{12}{16} = \frac{\quad}{4}$



3 d) $\frac{5}{15} = \frac{\quad}{5}$



3 e) $\frac{6}{15} = \frac{\quad}{5}$



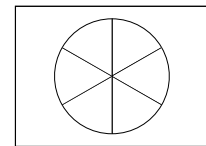
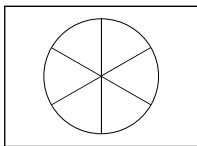
Namn _____

Förkorta

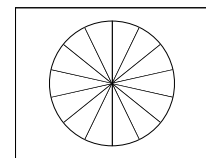
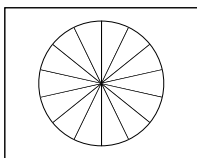
Exempel A – förkorta med 2

$$\frac{2}{4} = \frac{\cancel{2}}{\cancel{4}/2} = \frac{1}{2}$$

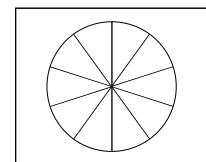
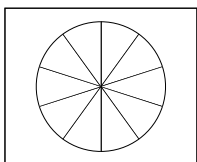
4 a) $\frac{4}{6} =$



4 b) $\frac{2}{14} =$



4 c) $\frac{8}{10} =$



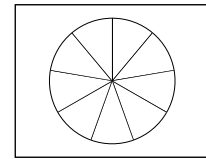
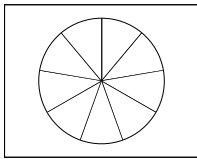
Namn _____

Förkorta

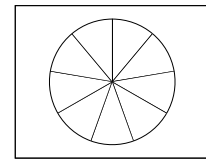
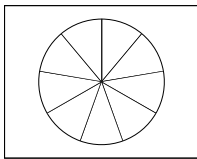
Exempel B – förkorta med 3

$$\frac{6}{9} = \frac{\cancel{6}^3}{\cancel{9}_3} = \frac{2}{3}$$

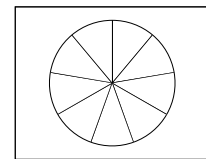
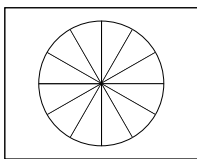
5 a) $\frac{3}{9} = -$



5 b) $\frac{6}{9} = -$



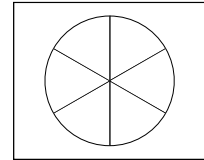
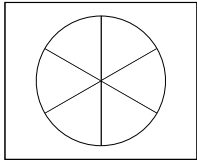
5 c) $\frac{3}{12} = -$



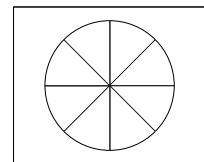
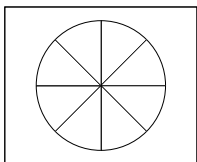
Namn _____

Förkorta!

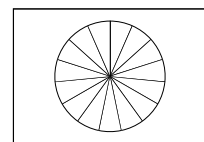
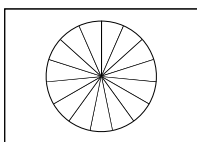
6 a) $\frac{2}{6} =$



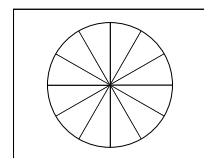
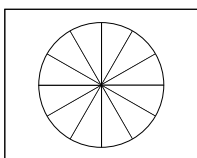
6 b) $\frac{6}{8} =$



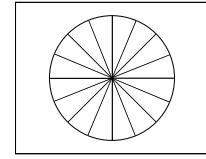
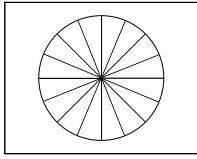
6 c) $\frac{3}{15} =$



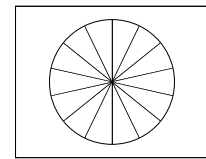
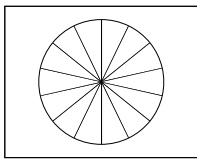
6 d) $\frac{10}{12} =$



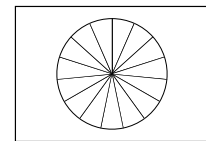
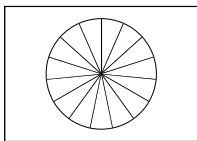
7 a) $\frac{4}{16} =$



7 b) $\frac{7}{14} =$



7 c) $\frac{10}{15} =$



7 d) $\frac{25}{30} =$

7 e) $\frac{35}{45} =$

7 f) $\frac{20}{50} =$

7 g) $\frac{40}{60} =$