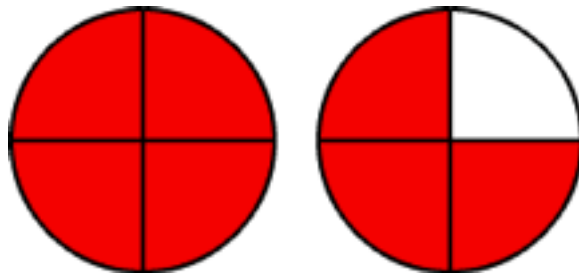


Mån v9
Namn

Vad visar bildarna? Svara i blandad form och bråkform.


1a



Blandad form

Bråkform

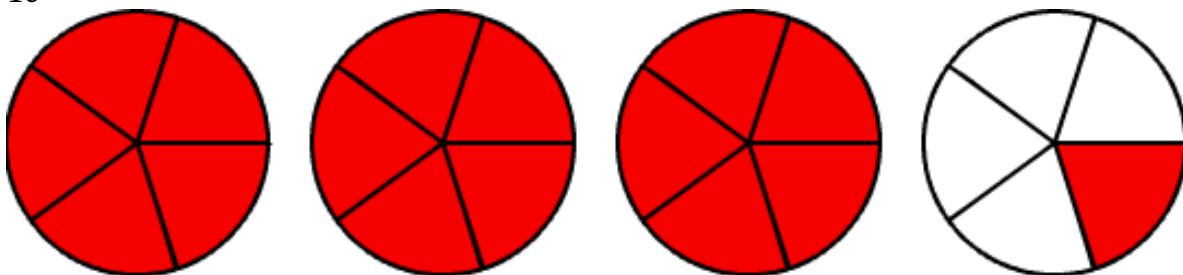
1b



Blandad form

Bråkform

1c



Blandad form _____

Bråkform _____

$$\begin{array}{r} 2 \quad a) \quad \quad 6 \quad 7 \\ - \quad 3 \quad 9 \\ \hline \end{array}$$

$$\begin{array}{r} b) \quad \quad \quad 3 \quad 1 \\ - \quad 1 \quad 4 \\ \hline \end{array}$$

$$\begin{array}{r} c) \quad \quad \quad 9 \quad 3 \\ - \quad 8 \quad 9 \\ \hline \end{array}$$

$$\begin{array}{r} d) \quad \quad \quad 5 \quad 4 \\ - \quad 3 \quad 2 \\ \hline \end{array}$$

3

Rita en trubbig vinkel.